
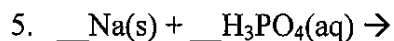
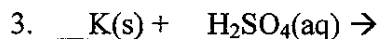
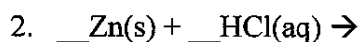
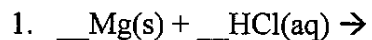


Name \_\_\_\_\_ Date \_\_\_\_\_ Class \_\_\_\_\_

### Reaction of Acid and Metal

For the reactions below, write the products and balance the reaction



7. Reaction number 3 is the most reactive . . .

- a) Which table shows the reactivity of metals \_\_\_\_\_  
b) How do you know reaction number 3 is the most reactive?

---

---

c) Rank the five reactions above (by number) from most reactive to least reactive.

Most Reactive: 3,

Least Reactive

8. List two metals that will not react with acid: \_\_\_\_\_ and \_\_\_\_\_